

Happy Friday Year One! 😊

As always, it is not necessary to print out all of these slides so please read them through carefully so you can decide exactly which are needed as a paper copy.

Thank you.

Session 5


WALT : Subtract one-digit and two-digit numbers to 20, including zero.

2


Jack had 17 magic beans.

He accidentally dropped 4.

How many does he have left?



My 0 to 30 Number Line




Ben cycles 16 miles to school. Bob cycles 21 miles to school.
How many miles less does Ben cycle?



My 0 to 30 Number Line



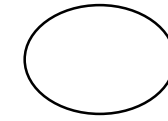
There were 7 stars in space.
An alien spaceship zapped 3 away!
How many stars were left?



My 0 to 30 Number Line



WALT : Subtract one-digit and two-digit numbers to 20, including zero.



5

There were 7 stars in space. An Alien spaceship zapped 3 away! How many stars were left?



Liz had 11 slices of pizza. She ate 5 slices. How many does she have left now?



Sam saw 15 rabbits in the field. 7 rabbits hopped away. How many are left in the field?



Jack had 17 magic beans. He accidentally dropped 4. How many does he have left?



Ben cycles 6 miles to school. Bob cycles 20 miles to school. How many miles less does Ben cycle?



Abbey plays outside for 5 minutes. Joe plays outside for 16 minutes. How many minutes longer is Joe outside?



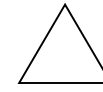
Zoe bakes 12 cookies for her friends. Pip eats 6. How many are left?



Ashley had 16 coloring pencils. Joe takes 7 to use. How many does Ashley have left?



WALT : Subtract one-digit and two-digit numbers to 20, including zero.



There were 20 stars in space. An Alien spaceship zapped 3 away! How many stars were left?



Liz had 21 slices of pizza. She ate 15 slices. How many does she have left now?



Sam saw 30 rabbits in the field. 7 rabbits hopped away. How many are left in the field?



Jack had 27 magic beans. He accidentally dropped 14. How many does he have left?



Ben cycles 19 miles to school. Bob cycles 29 miles to school. How many miles less does Ben cycle?



Abbey plays outside for 19 minutes. Joe plays outside for 30 minutes. How many minutes longer is Joe outside?



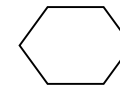
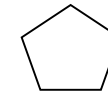
Zoe bakes 27 cookies for her friends. Pip eats 9. How many are left?



Ashley had 26 coloring pencils. Joe takes 7 to use. How many does Ashley have left?



WALT : Subtract one-digit and two-digit numbers to 20, including zero.



There were 50 stars in space. An Alien spaceship zapped 3 away! How many stars were left?



Liz had 41 slices of pizza. She ate 15 slices. How many does she have left now?



Sam saw 45 rabbits in the field. 27 rabbits hopped away. How many are left in the field?



Jack had 60 magic beans. He accidentally dropped 14. How many does he have left?



Ben cycles 29 miles to school. Bob cycles 55 miles to school. How many miles less does Ben cycle?



Abbey plays outside for 27 minutes. Joe plays outside for 59 minutes. How many minutes longer is Joe outside?



Zoe bakes 47 cookies for her friends. Pip eats 13. How many are left?



Ashley had 59 coloring pencils. Joe takes 17 to use. How many does Ashley have left?



Have a super weekend Year One!

